

Word Tracing Practice

an

van

ran

fan

tan

Dan

pan

man

can

than

IEP Spelling List- Week of March 16

Spelling Words (-an)

- 1. an**
- 2. van**
- 3. ran**
- 4. fan**
- 5. tan**
- 6. Dan**
- 7. pan**
- 8. man**
- 9. can**
- 10. than**

Print your name.

Directions: Using the sight words, write 3 or more sentences. Make sure you use all the words below and underline them.

can and my am you

Print your name.

Directions: Using the sight words, write 3 or more sentences. Make sure you use all the words below and underline them.

not, are, on, was, for, be, do, first

Print your name.

Directions: Using the sight words, write 3 or more sentences.
Make sure you use all the sight words below and underline them.

did look will get him



Add two 2-digit numbers in columns, no regrouping

Grade 1 Addition Worksheet

Find the sum.

$$\begin{array}{r} 1) \quad 80 \\ + \quad 11 \\ \hline \\ \hline \end{array}$$

$$\begin{array}{r} 2) \quad 70 \\ + \quad 26 \\ \hline \\ \hline \end{array}$$

$$\begin{array}{r} 3) \quad 27 \\ + \quad 40 \\ \hline \\ \hline \end{array}$$

$$\begin{array}{r} 4) \quad 23 \\ + \quad 23 \\ \hline \\ \hline \end{array}$$

$$\begin{array}{r} 5) \quad 10 \\ + \quad 16 \\ \hline \\ \hline \end{array}$$

$$\begin{array}{r} 6) \quad 10 \\ + \quad 4 \\ \hline \\ \hline \end{array}$$

$$\begin{array}{r} 7) \quad 84 \\ + \quad 14 \\ \hline \\ \hline \end{array}$$

$$\begin{array}{r} 8) \quad 83 \\ + \quad 15 \\ \hline \\ \hline \end{array}$$

$$\begin{array}{r} 9) \quad 35 \\ + \quad 31 \\ \hline \\ \hline \end{array}$$

$$\begin{array}{r} 10) \quad 9 \\ + \quad 80 \\ \hline \\ \hline \end{array}$$

$$\begin{array}{r} 11) \quad 22 \\ + \quad 30 \\ \hline \\ \hline \end{array}$$

$$\begin{array}{r} 12) \quad 31 \\ + \quad 11 \\ \hline \\ \hline \end{array}$$

$$\begin{array}{r} 13) \quad 21 \\ + \quad 2 \\ \hline \\ \hline \end{array}$$

$$\begin{array}{r} 14) \quad 16 \\ + \quad 31 \\ \hline \\ \hline \end{array}$$

$$\begin{array}{r} 15) \quad 13 \\ + \quad 24 \\ \hline \\ \hline \end{array}$$

$$\begin{array}{r} 16) \quad 48 \\ + \quad 30 \\ \hline \\ \hline \end{array}$$

$$\begin{array}{r} 17) \quad 46 \\ + \quad 32 \\ \hline \\ \hline \end{array}$$

$$\begin{array}{r} 18) \quad 41 \\ + \quad 23 \\ \hline \\ \hline \end{array}$$

$$\begin{array}{r} 19) \quad 2 \\ + \quad 17 \\ \hline \\ \hline \end{array}$$

$$\begin{array}{r} 20) \quad 33 \\ + \quad 34 \\ \hline \\ \hline \end{array}$$

Add two 2-digit numbers in columns, no regrouping

Grade 1 Addition Worksheet

Find the sum.

$$\begin{array}{r} 1) \quad 80 \\ + \quad 11 \\ \hline 91 \end{array}$$

$$\begin{array}{r} 2) \quad 70 \\ + \quad 26 \\ \hline 96 \end{array}$$

$$\begin{array}{r} 3) \quad 27 \\ + \quad 40 \\ \hline 67 \end{array}$$

$$\begin{array}{r} 4) \quad 23 \\ + \quad 23 \\ \hline 46 \end{array}$$

$$\begin{array}{r} 5) \quad 10 \\ + \quad 16 \\ \hline 26 \end{array}$$

$$\begin{array}{r} 6) \quad 10 \\ + \quad 4 \\ \hline 14 \end{array}$$

$$\begin{array}{r} 7) \quad 84 \\ + \quad 14 \\ \hline 98 \end{array}$$

$$\begin{array}{r} 8) \quad 83 \\ + \quad 15 \\ \hline 98 \end{array}$$

$$\begin{array}{r} 9) \quad 35 \\ + \quad 31 \\ \hline 66 \end{array}$$

$$\begin{array}{r} 10) \quad 9 \\ + \quad 80 \\ \hline 89 \end{array}$$

$$\begin{array}{r} 11) \quad 22 \\ + \quad 30 \\ \hline 52 \end{array}$$

$$\begin{array}{r} 12) \quad 31 \\ + \quad 11 \\ \hline 42 \end{array}$$

$$\begin{array}{r} 13) \quad 21 \\ + \quad 2 \\ \hline 23 \end{array}$$

$$\begin{array}{r} 14) \quad 16 \\ + \quad 31 \\ \hline 47 \end{array}$$

$$\begin{array}{r} 15) \quad 13 \\ + \quad 24 \\ \hline 37 \end{array}$$

$$\begin{array}{r} 16) \quad 48 \\ + \quad 30 \\ \hline 78 \end{array}$$

$$\begin{array}{r} 17) \quad 46 \\ + \quad 32 \\ \hline 78 \end{array}$$

$$\begin{array}{r} 18) \quad 41 \\ + \quad 23 \\ \hline 64 \end{array}$$

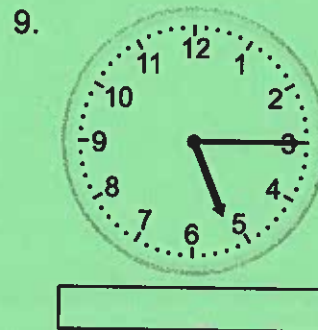








$$\begin{array}{r} 19) \quad 2 \\ + \quad 17 \\ \hline 19 \end{array}$$

$$\begin{array}{r} 20) \quad 33 \\ + \quad 34 \\ \hline 67 \end{array}$$

Telling time - quarter hours

Grade 1 Time Worksheet

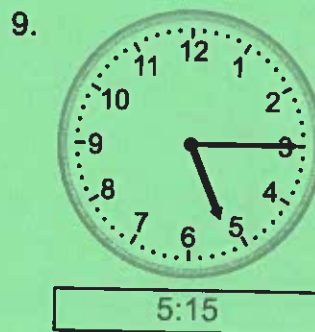

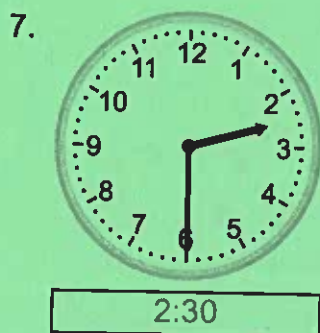






Write the time below each clock.



Telling time - quarter hours

Grade 1 Time Worksheet

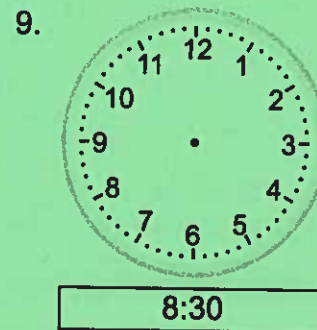
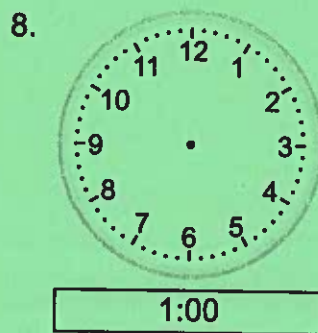
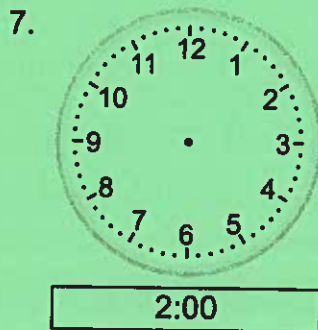
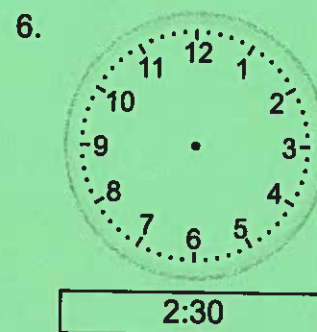
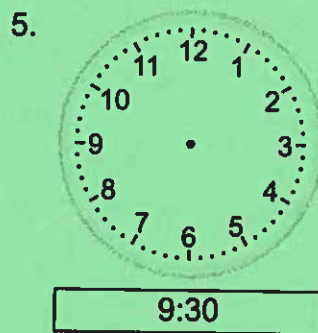
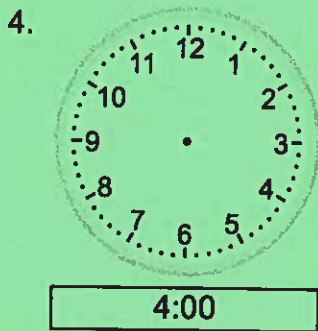
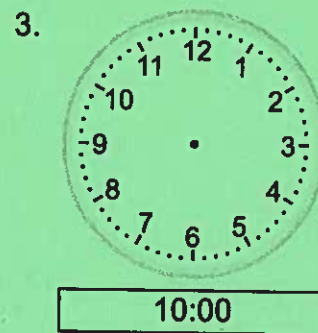
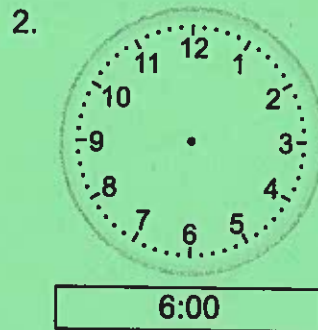
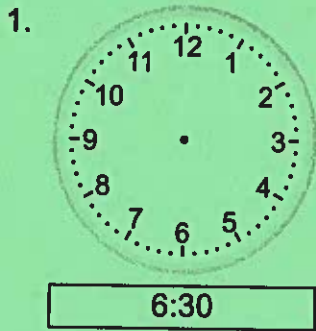
Write the time below each clock.



Telling time - half hours (draw the clock)

Grade 1 Time Worksheet

Draw the time shown on each clock.



Telling time - half hours (draw the clock)

Grade 1 Time Worksheet

Draw the time shown on each clock.

